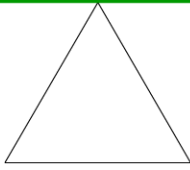




Shape and Space

e.g.



Equilateral



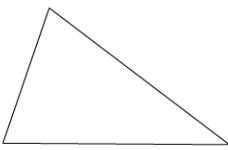
Isosceles



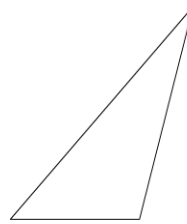
Scalene

Write on the lines below each shape, whether the triangles are equilateral, isosceles or scalene.

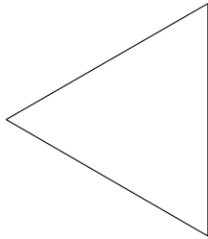
Q1



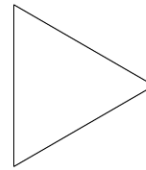
Q2



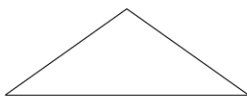
Q3



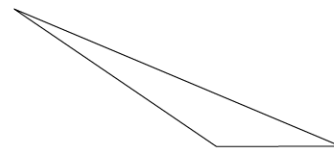
Q4



Q5



Q6



Q7



Q8

